

CANDIDATE
NAME

CENTRE
NUMBER

--	--	--	--	--

CANDIDATE
NUMBER

--	--	--	--

* 5 2 0 1 7 1 8 8 4 4 *



CHEMISTRY

0620/43

Paper 4 Theory (Extended)

May/June 2019

1 hour 15 minutes

Candidates answer on the Question Paper.

No Additional Materials are required.

READ THESE INSTRUCTIONS FIRST

Write your centre number, candidate number and name on all the work you hand in.

Write in dark blue or black pen.

You may use an HB pencil for any diagrams or graphs.

Do not use staples, paper clips, glue or correction fluid.

DO **NOT** WRITE IN ANY BARCODES.

Answer **all** questions.

Electronic calculators may be used.

A copy of the Periodic Table is printed on page 16.

You may lose marks if you do not show your working or if you do not use appropriate units.

At the end of the examination, fasten all your work securely together.

The number of marks is given in brackets [] at the end of each question or part question.

This syllabus is regulated for use in England, Wales and Northern Ireland as a Cambridge International Level 1/Level 2 Certificate.

This document consists of **14** printed pages and **2** blank pages.

1 Atoms contain particles called electrons, neutrons and protons.

(a) Complete the table.

particle	where the particle is found in an atom	relative mass	relative charge
	orbiting the nucleus	$\frac{1}{1840}$	
			+1
	in the nucleus		

[3]

(b) How many electrons, neutrons and protons are there in the ion shown?



number of electrons

number of neutrons

number of protons

[3]

[Total: 6]

2 Magnesium exists as three isotopes, $^{24}_{12}\text{Mg}$, $^{25}_{12}\text{Mg}$ and $^{26}_{12}\text{Mg}$.

(a) State, in terms of the total numbers of electrons, neutrons and protons, **one** difference and **two** similarities between these magnesium isotopes.

difference

similarity 1

similarity 2

[3]

(b) All isotopes of magnesium react with dilute hydrochloric acid to make hydrogen and a salt.

(i) Why do all isotopes of magnesium react in the same way?

.....

.....

..... [2]

(ii) Write a chemical equation for the reaction between magnesium and dilute hydrochloric acid.

..... [2]

(iii) Describe a test for hydrogen.

test

result

[2]

(c) Magnesium is a metal.

Describe the structure and bonding of metals. Include a labelled diagram in your answer.

.....

.....

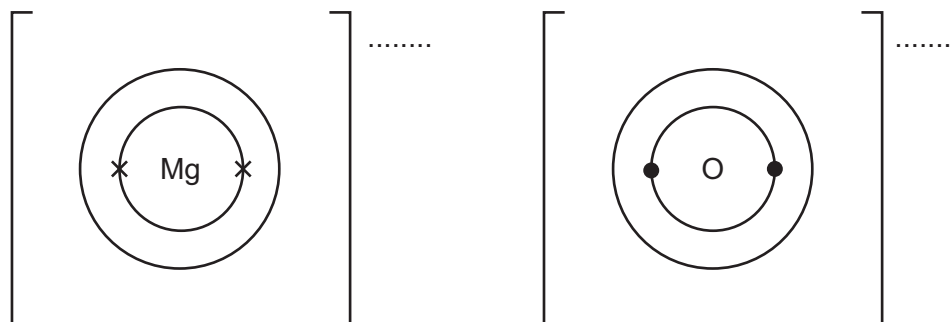
.....

.....

[3]

(d) Magnesium reacts with oxygen to form the ionic compound magnesium oxide.

- (i) Complete the dot-and-cross diagrams to show the electronic structures of the ions in magnesium oxide. Show the charges on the ions.



[3]

- (ii) Magnesium oxide melts at 2853 °C.

Why does magnesium oxide have a high melting point?

.....
 [1]

- (iii) Explain why molten magnesium oxide can conduct electricity.

.....

 [1]

[Total: 17]

3 (a) (i) Sodium is in Group I of the Periodic Table.

Describe **two** physical properties of sodium which are different from the physical properties of transition elements such as copper.

1

.....

2

.....

[2]

(ii) Sodium reacts rapidly with water.

Give **one** observation made when sodium is added to water.

..... [1]

(b) Some car airbags contain sodium azide.

When a car airbag is used the sodium azide, NaN_3 , decomposes.

The products are nitrogen and sodium.

The equation for the decomposition of sodium azide is shown.



Calculate the mass, in g, of sodium azide needed to produce 144 dm^3 of nitrogen using the following steps.

- Calculate the number of moles in 144 dm^3 of N_2 measured at room temperature and pressure.

moles of N_2 = mol

- Determine the number of moles of NaN_3 needed to produce this number of moles of N_2 .

moles of NaN_3 = mol

- Calculate the relative formula mass, M_r , of NaN_3 .

M_r =

- Calculate the mass of NaN_3 needed to produce 144 dm^3 of N_2 .

..... g

[4]

- (c) Some airbags contain silicon(IV) oxide.
When the airbag is used sodium oxide is formed.

Oxides can be classified as acidic, amphoteric, basic or neutral.

Classify each of these oxides:

sodium oxide

silicon(IV) oxide.

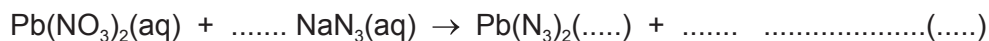
[2]

- (d) Lead(II) azide is insoluble in water. Solid lead(II) azide can be made in a precipitation reaction between aqueous lead(II) nitrate and aqueous sodium azide.
Lead(II) azide has the formula $\text{Pb}(\text{N}_3)_2$.

- (i) Deduce the formula of the azide ion.

..... [1]

- (ii) Complete the chemical equation for the reaction between aqueous lead(II) nitrate and aqueous sodium azide to form solid lead(II) azide and aqueous sodium nitrate. Include state symbols.



[2]

- (iii) Describe how you could obtain a sample of lead(II) azide that is **not** contaminated with any soluble salts from the reaction mixture.

.....

 [2]

- (e) An organic compound made from sodium azide has the composition by mass: 49.5% carbon, 7.2% hydrogen and 43.3% nitrogen.

Calculate the empirical formula of the organic compound.

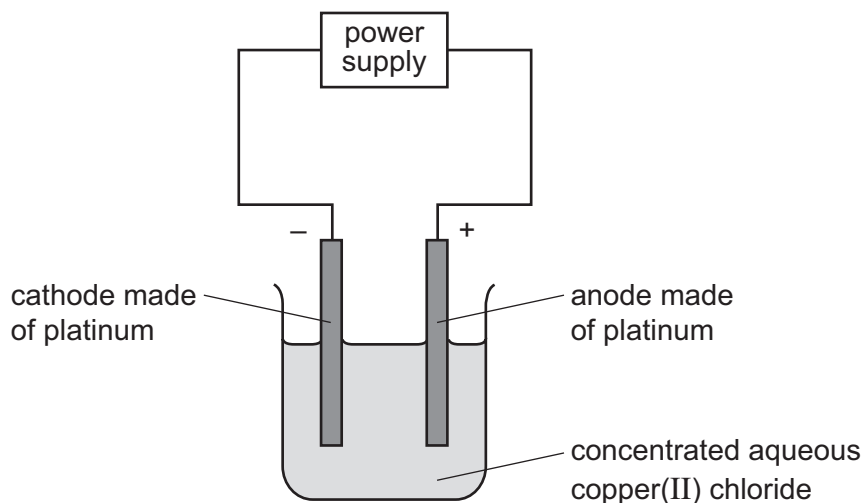
[3]

[Total: 17]

Question 4 starts on the next page.

4 Solutions of ionic compounds can be broken down by electrolysis.

(a) Concentrated aqueous copper(II) chloride was electrolysed using the apparatus shown.



The ionic half-equations for the reactions at the electrodes are shown.



(i) Platinum is a solid which is a good conductor of electricity.

State **one** other property of platinum which makes it suitable for use as electrodes.

.....
 [1]

(ii) State what would be **seen** at the positive electrode during this electrolysis.

.....
 [1]

(iii) State and explain what would happen to the mass of the negative electrode during this electrolysis.

.....

 [2]

- (iv) The concentrated aqueous copper(II) chloride electrolyte is green.

Suggest what would happen to the colour of the electrolyte during this electrolysis.
Explain your answer.

.....

 [2]

- (v) Identify the species that is oxidised during this electrolysis.
Explain your answer.

species that is oxidised

explanation

..... [2]

- (b) Metal objects can be electroplated with silver.

- (i) Describe how a metal spoon can be electroplated with silver.
Include:

- what to use as the positive electrode and as the negative electrode
- what to use as the electrolyte
- an ionic half-equation to show the formation of silver.

You may include a diagram in your answer.

.....

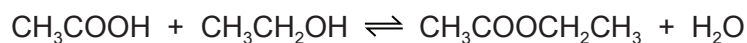
 ionic half-equation [4]

- (ii) Give **one** reason why metal spoons are electroplated with silver.

.....
 [1]

[Total: 13]

- 5 Carboxylic acids react with alcohols to form esters. The reaction is reversible. The equation for the reaction between ethanoic acid and ethanol is shown.



- (a) (i) What is the name of the ester formed in this reaction?

..... [1]

- (ii) Draw the structure of the ester formed. Show all of the atoms and all of the bonds.

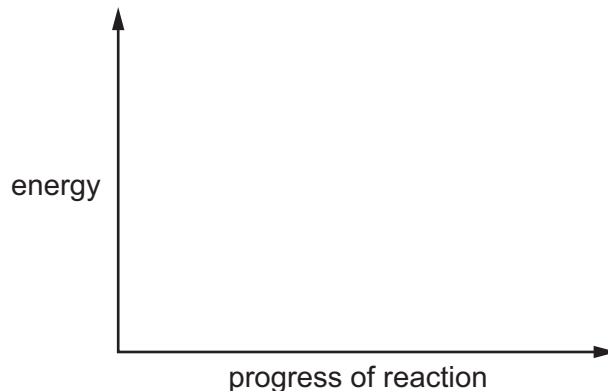
[1]

- (b) The reaction between ethanoic acid and ethanol is exothermic.

Draw an energy level diagram for this reaction.

On your diagram label:

- the reactants and products
- the energy change of the reaction, ΔH .



[3]

- (c) Concentrated sulfuric acid is a catalyst for this reaction.

What is meant by the term *catalyst*?

.....
 [2]

- (d) The rate of reaction can be increased by increasing the temperature.

Explain why increasing the temperature increases the rate of reaction.

.....

.....

.....

.....

.....

.....

..... [4]

- (e) The reaction between ethanoic acid and ethanol reaches equilibrium.

- (i) The reaction between ethanoic acid and ethanol is exothermic.

State and explain the effect, if any, of increasing the temperature on the amount of ester at equilibrium.

.....

.....

..... [2]

- (ii) State and explain the effect, if any, of removing water from the mixture on the amount of ester at equilibrium.

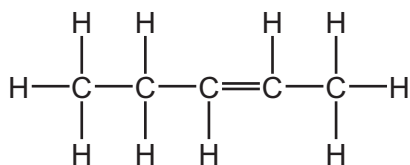
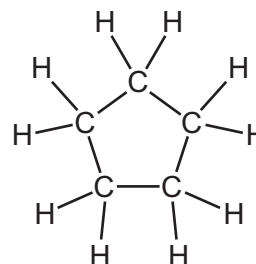
.....

.....

..... [2]

[Total: 15]

- 6 (a) Two hydrocarbons have the structures shown.

hydrocarbon **A**hydrocarbon **B**

- (i) Why are these **two** compounds *hydrocarbons*?

.....
 [2]

- (ii) Hydrocarbon **B** reacts in the same way as a typical alkane.

Describe a chemical test to tell the difference between hydrocarbon **A** and hydrocarbon **B**.

State the name of the reagent you would use and the result you would obtain with hydrocarbon **A** and hydrocarbon **B**.

reagent

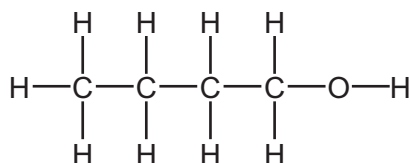
result with hydrocarbon **A**

result with hydrocarbon **B**

[3]

- (b) Alkenes react with steam to form alcohols.

Compound **C** is an alcohol.

compound **C**

Draw the structure of the alkene which could be reacted with steam to make compound **C**. Show all of the atoms and all of the bonds.

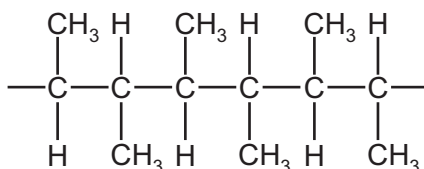
[1]

(c) Alkenes can form polymers.

(i) What type of polymerisation occurs when alkenes form polymers?

..... [1]

(ii) Part of the structure of a polymer is shown.

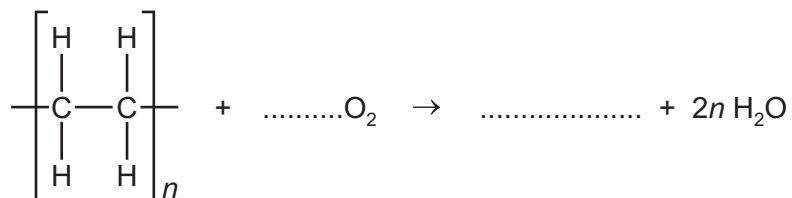


Draw the structure of the alkene from which this polymer can be made. Show all of the atoms and all of the bonds.

[1]

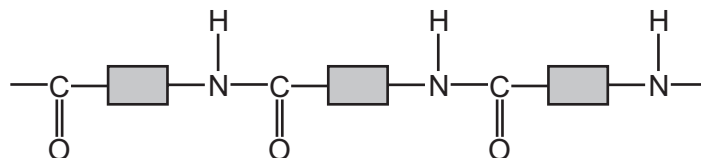
(iii) Polymers can undergo incomplete combustion to form carbon monoxide.

Complete the chemical equation for the incomplete combustion of poly(ethene). The only carbon-containing product is carbon monoxide.



[2]

(d) Part of the structure of a polyamide is shown.



This polyamide is formed from identical monomers. Complete the diagram to show the structure of **one** monomer. Show all of the atoms and all of the bonds.



[2]

[Total: 12]

BLANK PAGE

Permission to reproduce items where third-party owned material protected by copyright is included has been sought and cleared where possible. Every reasonable effort has been made by the publisher (UCLES) to trace copyright holders, but if any items requiring clearance have unwittingly been included, the publisher will be pleased to make amends at the earliest possible opportunity.

To avoid the issue of disclosure of answer-related information to candidates, all copyright acknowledgements are reproduced online in the Cambridge Assessment International Education Copyright Acknowledgements Booklet. This is produced for each series of examinations and is freely available to download at www.cambridgeinternational.org after the live examination series.

Cambridge Assessment International Education is part of the Cambridge Assessment Group. Cambridge Assessment is the brand name of the University of Cambridge Local Examinations Syndicate (UCLES), which itself is a department of the University of Cambridge.

The Periodic Table of Elements

		Group																																																																																																																																																																																																																																																																																																																																																																																																																																																																																																																																																																																																																																																																																																																																																																																																																																																																																																																																																																																																							
I	II	III	IV	V	VI	VII	VIII																																																																																																																																																																																																																																																																																																																																																																																																																																																																																																																																																																																																																																																																																																																																																																																																																																																																																																																																																																																																		
1	2	3	4	5	6	7	8	9	10	11	12	13	14	15	16	17	18																																																																																																																																																																																																																																																																																																																																																																																																																																																																																																																																																																																																																																																																																																																																																																																																																																																																																																																																																																																								
Li lithium 7	Be beryllium 9	B boron 11	C carbon 12	N nitrogen 14	O oxygen 16	F fluorine 19	Ne neon 20	Na sodium 23	Mg magnesium 24	Al aluminium 27	Si silicon 28	P phosphorus 31	S sulfur 32	Cl chlorine 35.5	Ar argon 40	K potassium 39	Ca calcium 40	Sc scandium 45	Ti titanium 48	V vanadium 51	Cr chromium 52	Mn manganese 55	Fe iron 56	Co cobalt 59	Ni nickel 59	Cu copper 64	Zn zinc 65	Ga gallium 70	Ge germanium 73	As arsenic 75	Se selenium 79	Br bromine 80	Kr krypton 84	Rb rubidium 85	Sr strontium 88	Y yttrium 89	Zr zirconium 91	Nb niobium 93	Mo molybdenum 96	Tc technetium —	Ru ruthenium 101	Rh rhodium 103	Pd palladium 106	Ag silver 108	Cd cadmium 112	In indium 115	Sn tin 119	Sb antimony 122	Te tellurium 128	I iodine 127	Xe xenon 131	Cs caesium 133	Ba barium 137	La lanthanum 139	Hf hafnium 178	Ta tantalum 181	W tungsten 184	Re rhenium 186	Os osmium 190	Ir iridium 192	Pt platinum 195	Au gold 197	Hg mercury 201	Tl thallium 204	Pb lead 207	Bi bismuth 209	Po polonium —	At astatine —	Rn radon —	Fr francium —	Ra radium —	Ac actinium —	Rf rutherfordium —	Db dubnium —	Sg seaborgium —	Bh bohrium —	Hs hassium —	Mt meitnerium —	Ds darmstadtium —	Rg roentgenium —	Cn copernicium —	Fl flerovium —	Lv livermorium —	Uu ununoctium —	Og oganeson —																																																																																																																																																																																																																																																																																																																																																																																																																																																																																																																																																																																																																																																																																																																																																																																																																																																																																																																				
3	4	5	6	7	8	9	10	11	12	13	14	15	16	17	18	19	20	21	22	23	24	25	26	27	28	29	30	31	32	33	34	35	36	37	38	39	40	41	42	43	44	45	46	47	48	49	50	51	52	53	54	55	56	57–71	72	73	74	75	76	77	78	79	80	81	82	83	84	85	86	87	88	89–103	104	105	106	107	108	109	110	111	112	113	114	115	116	117	118	119	120	121	122	123	124	125	126	127	128	129	130	131	132	133	134	135	136	137	138	139	140	141	142	143	144	145	146	147	148	149	150	151	152	153	154	155	156	157	158	159	160	161	162	163	164	165	166	167	168	169	170	171	172	173	174	175	176	177	178	179	180	181	182	183	184	185	186	187	188	189	190	191	192	193	194	195	196	197	198	199	200	201	202	203	204	205	206	207	208	209	210	211	212	213	214	215	216	217	218	219	220	221	222	223	224	225	226	227	228	229	230	231	232	233	234	235	236	237	238	239	240	241	242	243	244	245	246	247	248	249	250	251	252	253	254	255	256	257	258	259	260	261	262	263	264	265	266	267	268	269	270	271	272	273	274	275	276	277	278	279	280	281	282	283	284	285	286	287	288	289	290	291	292	293	294	295	296	297	298	299	300	301	302	303	304	305	306	307	308	309	310	311	312	313	314	315	316	317	318	319	320	321	322	323	324	325	326	327	328	329	330	331	332	333	334	335	336	337	338	339	340	341	342	343	344	345	346	347	348	349	350	351	352	353	354	355	356	357	358	359	360	361	362	363	364	365	366	367	368	369	370	371	372	373	374	375	376	377	378	379	380	381	382	383	384	385	386	387	388	389	390	391	392	393	394	395	396	397	398	399	400	401	402	403	404	405	406	407	408	409	410	411	412	413	414	415	416	417	418	419	420	421	422	423	424	425	426	427	428	429	430	431	432	433	434	435	436	437	438	439	440	441	442	443	444	445	446	447	448	449	450	451	452	453	454	455	456	457	458	459	460	461	462	463	464	465	466	467	468	469	470	471	472	473	474	475	476	477	478	479	480	481	482	483	484	485	486	487	488	489	490	491	492	493	494	495	496	497	498	499	500	501	502	503	504	505	506	507	508	509	510	511	512	513	514	515	516	517	518	519	520	521	522	523	524	525	526	527	528	529	530	531	532	533	534	535	536	537	538	539	540	541	542	543	544	545	546	547	548	549	550	551	552	553	554	555	556	557	558	559	560	561	562	563	564	565	566	567	568	569	570	571	572	573	574	575	576	577	578	579	580	581	582	583	584	585	586	587	588	589	590	591	592	593	594	595	596	597	598	599	600	601	602	603	604	605	606	607	608	609	610	611	612	613	614	615	616	617	618	619	620	621	622	623	624	625	626	627	628	629	630	631	632	633	634	635	636	637	638	639	640	641	642	643	644	645	646	647	648	649	650	651	652	653	654	655	656	657	658	659	660	661	662	663	664	665	666	667	668	669	670	671	672	673	674	675	676	677	678	679	680	681	682	683	684	685	686	687	688	689	690	691	692	693	694	695	696	697	698	699	700	701	702	703	704	705	706	707	708	709	710	711	712	713	714	715	716	717	718	719	720	721	722	723	724	725	726	727	728	729	730	731	732	733	734	735	736	737	738	739	740	741	742	743	744	745	746	747	748	749	750	751	752	753	754	755	756	757	758	759	760	761	762	763	764	765	766	767	768	769	770	771	772	773	774	775	776	777	778	779	780	781	782	783	784	785	786	787	788	789	790	791	792	793	794	795	796	797	798	799	800	801	802	803	804	805	806	807	808	809	810	811	812	813	814	815	816	817	818	819	820	821	822	823	824	825	826	827	828	829	830	831	832	833	834	835	836	837	838	839	840	841	842	843	844	845	846	847	848	849	850	851	852	853	854	855	856	857	858	859	860	861	862	863	864	865	866	867	868	869	870	871	872	873	874	875	876	877	878	879	880	881	882	883	884	885	886	887	888	889	890	891	892	893	894	895	896	897	898	899	900	901	902	903	904	905	906	907	908	909	910	911	912	913	914	915	916	917	918	919	920	921	922	923	924	925	926	927	928	929	930	931	932	933	934	935	936	937	938	939	940	941	942	943	944	945	946	947	948	949	950	951	952	953	954	955	956	957	958	959	960	961	962	963	964	965	966	967	968	969	970	971	972	973	974	975	976	977	978	979	980	981	982	983	984	985	986	987	988	989	990	991	992	993	994	995	996	997	998	999	1000

Key

atomic number
atomic symbol
name
relative atomic mass

lanthanoids

actinoids

57	La lanthanum 139	58	Ce cerium 140	59	Pr praseodymium 141	60	Nd neodymium 144	61	Pm promethium —	62	Sm samarium 150	63	Eu europium 152	64	Gd gadolinium 157	65	Tb terbium 159	66	Dy dysprosium 163	67	Ho holmium 165	68	Er erbium 167	69	Tm thulium 169	70	Yb ytterbium 173	71	Lu lutetium 175
89	Ac actinium —	90	Th thorium 232	91	Pa protactinium 231	92	U uranium 238	93	Np neptunium —	94	Pu plutonium —	95	Am americium —	96	Cm curium —	97	Bk berkelium —	98	Cf californium —	99	Es einsteinium —	100	Fm fermium —	101	Md mendelevium —	102	No nobelium —	103	Lr lawrencium —

The volume of one mole of any gas is 24 dm³ at room temperature and pressure (r.t.p.).